


Lesson 37

- $17 - 11 =$
- $15 + 7 =$
- $38 + 10 =$

4. Look at the chart. How many pounds of peaches, strawberries, and plums did Mr. Hatley buy?



Fruit Mr. Hatley Bought at the Store

Fruit	Pounds
Bananas	4
Apples	3
Peaches	4
Strawberries	2
Plums	6

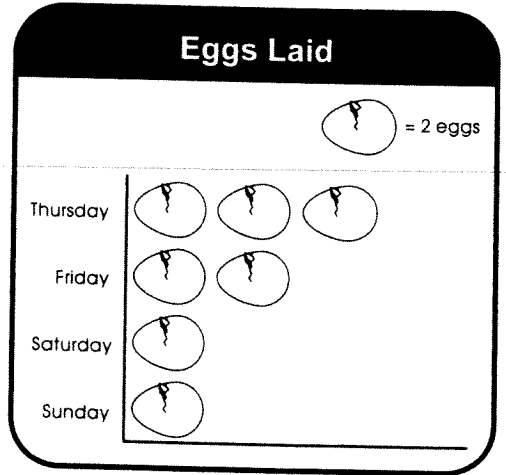
Mr. Hatley bought _____ pounds of peaches, strawberries, and plums.

5. Julie has 16 red balls and 14 blue balls. How many balls does she have in all?

Julie has _____ balls in all.

Lesson 38

1. Look at the picture graph. How many more eggs were laid on Thursday and Friday than on Saturday and Sunday?




_____ more eggs were laid on Thursday and Friday than on Saturday and Sunday.

2. Count by 5s. 75, 80, 85, _____, _____, 100

3. $24 + 15 =$

4. Wendy is seventh in line waiting for a store to open. There are 17 people waiting in line. How many people are in line behind Wendy?

_____ people are in line behind Wendy.



5. Look at the Base Ten Blocks. Write the number shown.